

EECS 20N: Structure and Interpretation of Signals and Systems MIDTERM 2
Department of Electrical Engineering and Computer Sciences 24 October 2006
UNIVERSITY OF CALIFORNIA BERKELEY

EECS 20N, Fall, 2006, Midterm 2, Babak

Basic Formulas:

Discrete Fourier Series (DFS) Complex exponential Fourier series synthesis and analysis equations for a periodic discrete-time signal having period p :


$$x(n) = \sum_{k=\langle p \rangle} X_k e^{ik\omega_0 n} \quad \longleftrightarrow \quad X_k = \frac{1}{p} \sum_{n=\langle p \rangle} x(n) e^{-ik\omega_0 n},$$

where $p = \frac{2\pi}{\omega_0}$ and $\langle p \rangle$ denotes a suitable discrete interval of length p (i.e., an

interval containing p continuous integers). For example, $\sum_{k=\langle p \rangle}$ may denote

$$\sum_{k=0}^{p-1} \text{ or } \sum_{k=1}^p.$$

MT2.1(20 Points) Consider a continuous-time system $F : [\mathbb{R} \rightarrow \mathbb{C}] \rightarrow [\mathbb{R} \rightarrow \mathbb{C}]$ having input signal x and output signal y , as shown below:



This system takes the real part of its input signal:

$$y = F(x) = \text{Re}(x).$$

In other words,

$$\forall t \in \mathbb{R}, \quad y(t) = \text{Re}(x)$$

Where $\text{Re}(\bullet)$ denotes taking the real part of a number. For each part below, you must explain your reasoning succinctly, but clearly and convincingly.

(a) Select the strongest true assertion from the list below.

- (i) The system must be memoryless.
- (ii) The system could be memoryless, but does not have to be.
- (iii) The system cannot be memoryless.

(b) Select the strongest true assertion from the list below.

- (i) The system must be causal.
- (ii) The system could be causal, but does not have to be.
- (iii) The system cannot be causal.

(c) Select the strongest true assertion from the list below.

- (i) The system must be time invariant.
- (ii) The system could be time invariant, but does not have to be.
- (iii) The system cannot be time invariant.

(d) Select the strongest true assertion from the list below.

- (i) The system must be linear.
- (ii) The system could be linear, but does not have to be.
- (iii) The system cannot be linear.

MT2.2 (25 Points) The unit-step response¹ s of a discrete-time linear, time-invariant system is given by:

$$\forall n \in \mathbb{Z}, \quad s(n) = (n+1)u(n),$$

Where u is the unit-step signal characterized as follows:

$$\forall n \in \mathbb{Z}, \quad u(n) = \begin{cases} 0 & n < 0 \\ 1 & n \geq 0. \end{cases}$$

Explain your reasoning for each part succinctly, but clearly and convincingly.

- (a) Determine and provide a well-labeled sketch of h , the impulse response of the system.

¹ Recall that the unit-step response of a system is, as the name suggests, the response of the system to the unit-step input signal.

(b) Select the strongest true assertion from the list below.

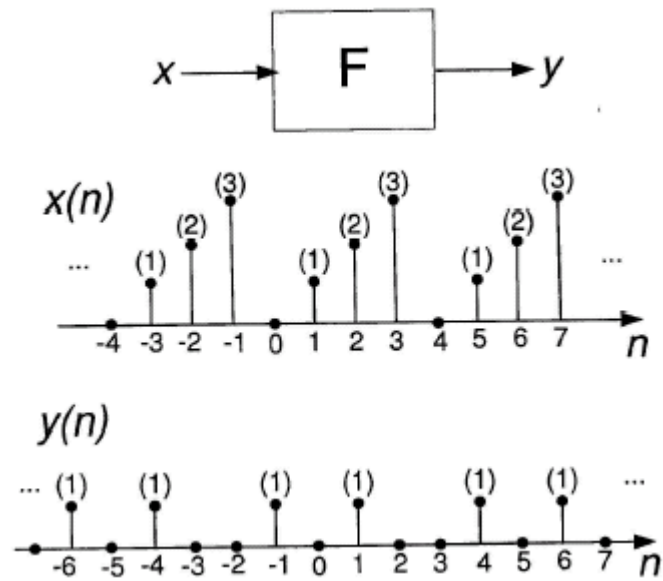
- (i) The system must be memoryless.
- (ii) The system could be memoryless, but does not have to be.
- (iii) The system cannot be memoryless.

(c) Determine a simple expression for

$$\sum_{m=-\infty}^n h(m).$$

Hint: Your answer will depend on n . You should be able to solve this part even without knowing the impulse response h from part (a).

MT2.3 (25 Points) Consider a discrete-time system $F : [\mathbb{Z} \rightarrow \mathbb{C}] \rightarrow [\mathbb{Z} \rightarrow \mathbb{C}]$ having a periodic input signal x and a corresponding periodic output signal y , as shown below:




- (a) Determine (p_x, ω_x) and (p_y, ω_y) , the period and fundamental frequency of x and y , respectively.

- (b) Determine the complex exponential discrete Fourier series (DFS) representation of the output signal y . In particular, determine a simple expression for the coefficients Y_k in the DFS expansion

$$Y_k = \frac{1}{P_y} \sum_{n=\langle p_y \rangle} y(n) e^{-ik\omega_y n}.$$

- (c) Select the strongest true assertion from the list below. Explain your reasoning succinctly, but clearly and convincingly.
- (i) The system must be LTI.
 - (ii) The system could be LTI, but does not have to be.
 - (iii) The system cannot be LTI.

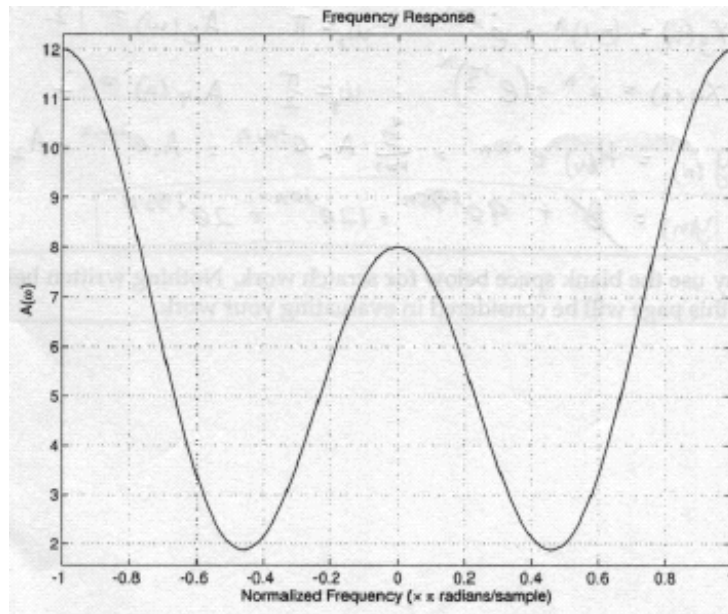
MT2.4 (20 Points) Consider a discrete-time LTI filter $A : [\mathbb{Z} \rightarrow \mathbb{C}] \rightarrow [\mathbb{Z} \rightarrow \mathbb{C}]$ having impulse response a and frequency response A . The figure below is a graphical, input-output depiction of the filter:



Recall that the frequency response and impulse response are related as follows:

$$\forall \omega \in \mathbb{R}, \quad A(\omega) = \sum_{n=-\infty}^{\infty} a(n)e^{-i\omega n}.$$

The figure below depicts $A(\omega), \forall \omega \in [-\pi, +\pi]$. Notice that for this particular filter, $A(\omega)$ is real-valued at all frequencies.



The frequency axis in the figure is normalized by π ; hence for example, the normalized frequencies 0.5 and 1 refer to $\omega = \pi/2$ and $\omega = \pi$ radians per sample, respectively.

Determine a reasonable and simple (possibly approximate) expression for the output y of the filter, if the input x is:

$$\forall n \in \mathbb{Z}, \quad x(n) = e^{i\pi/3} + \cos\left(\frac{4\pi}{5}n\right) + (-1)^n + i^n.$$

Note that there is no “ n ” in the first term. This is not a typographical error.

MT2.5 (15 Points) The impulse response h of a discrete-time LTI system is given by:

$$\forall n \in \mathbb{Z}, \quad h(n) = \left(\frac{1}{2}\right)^n u(n),$$

where u is the unit-step function.

(a) Select the strongest true assertion from the list below.

- (i) The system must be causal.
- (ii) The system could be causal, but does not have to be.
- (iii) The system cannot be causal.

(b) Determine a simple expression for the frequency response H of the system. Recall that the frequency response and impulse response are related as follows:

$$\forall \omega \in \mathbb{Z}, \quad H(\omega) = \sum_{n=-\infty}^{\infty} h(n)e^{-i\omega n}.$$

Hint: You may find the following helpful. If $|\alpha| < 1$, then $\sum_{n=0}^{\infty} \alpha^n = \frac{1}{1-\alpha}$.